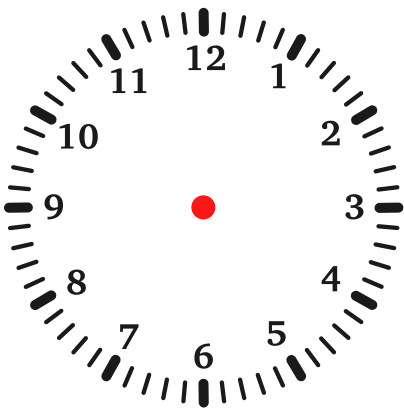
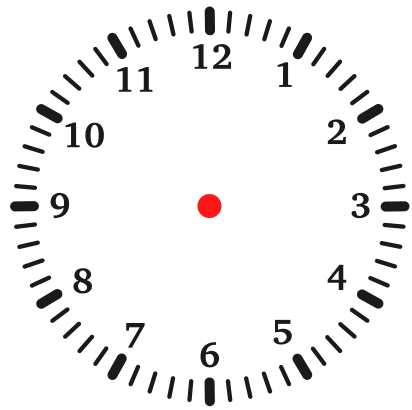


LEGGERE L'OROLOGIO

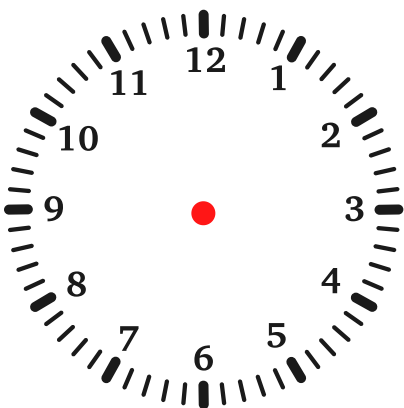
Disegna le lancette.



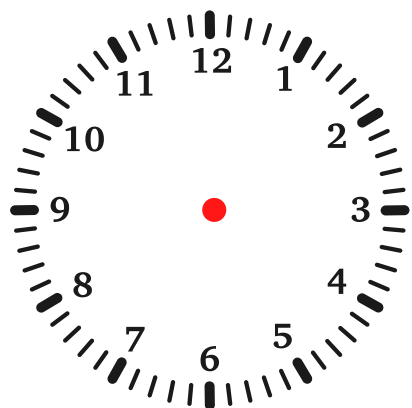
SONO LE ORE 3
E 20 MINUTI



SONO LE ORE 12
E 15 MINUTI



SONO LE ORE 6
E 10 MINUTI



SONO LE ORE 12
E 30 MINUTI